

June 17, 2026

Dear Incoming 2nd Grade Parents and Students,

Over the summer months, it is expected that your child will complete a few summer activities that will help prepare them for second grade. Each child is expected to read **2 books** over the summer and complete the **book reports**. Attached, you will find a suggested reading list and review worksheets. ***Please know that this is just a suggested reading list and your child may choose grade appropriate books that are not on the list.***

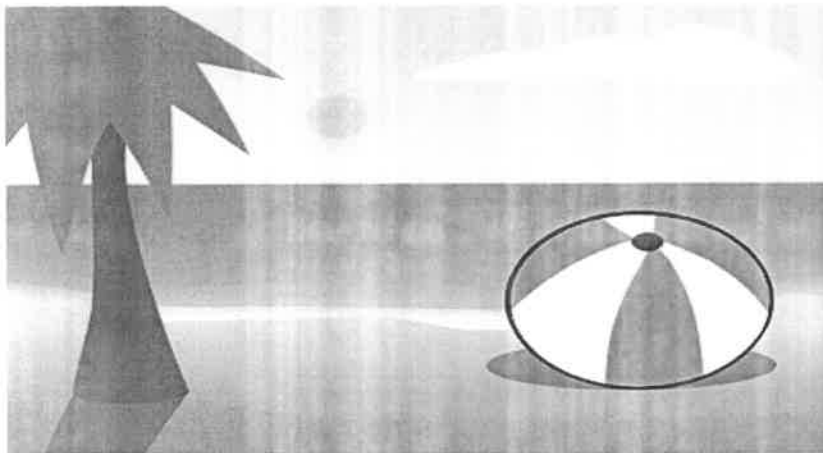
In addition, your child is required to practice both math and reading using their IXL accounts. You will also find a list of school supplies that they will need for September. I hope that you all have a safe and healthy summer. I look forward to seeing you in September

*****Please send \$6.50 in an envelope on the first day of school for an assignment pad.***

Sincerely,

Mrs. Penn

(any questions feel free to email me at bpenn@olmc.ws)



2nd Grade Supply List

2 marble wide ruled composition notebooks

2 pocket folders

4 sharpened pencils at all times

1 ruler (inches/centimeters)

1 pair of scissors

1 glue stick and one white glue

1 box of 36 crayons (no more)

1 zippered pencil case (soft)

1 box of markers

1 jumbo eraser

3 boxes of tissues

1 pack of white copy paper

1 container of Clorox wipes

1 pair of headphones for the Ipads

* Please have **contact paper** available at home for all workbooks!!

Summer Break Brain Food WEEK 1: DAY 1

Directions: place the words in ABC order.

play
made
and
jump
look

1. _____

2. _____

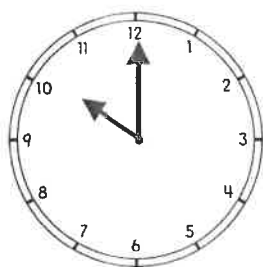
3. _____

4. _____

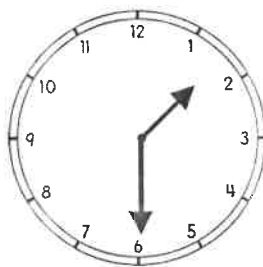
5. _____

Write the time shown on the clock.

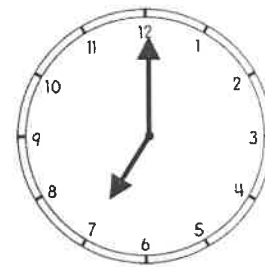
WEEK 1: DAY 2




⋮



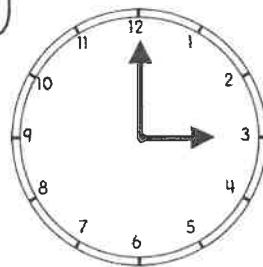
⋮



⋮




⋮



⋮



STACK THE STARFISH



Complete each starfish stack. Fill in the missing addend to make 10, 15, or 20.


Make 10

1.




$$2 + \underline{\quad} = 10$$

2.




$$\underline{\quad} + 7 = 10$$

3.



$$5 + \underline{\quad} = 10$$


4.



$$\underline{\quad} + 9 = 10$$


Make 15

5.




$$6 + \underline{\quad} = 15$$

6.




$$\underline{\quad} + 8 = 15$$

7.



$$10 + \underline{\quad} = 15$$


8.



$$\underline{\quad} + 4 = 15$$


Make 20

9.




$$12 + \underline{\quad} = 20$$

10.




$$\underline{\quad} + 5 = 20$$

11.



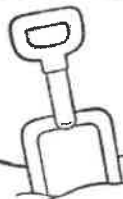



$$7 + \underline{\quad} = 20$$

12.



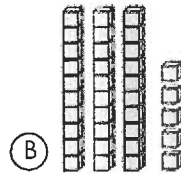
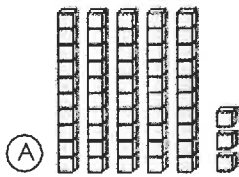
$$\underline{\quad} + 14 = 20$$



1 Write the missing numbers.

21, _____, 23, 24, 25, _____, 27

2 Which set shows 53?



3 $8 + 5 = \underline{\quad}$

$10 + 9 = \underline{\quad}$

$13 + 4 = \underline{\quad}$

$6 + 3 = \underline{\quad}$

4 Draw a line from the coin to its matching value.



• 10¢



• 1¢



• 5¢

5 If today is Wednesday, what day was it yesterday?

(A) Tuesday

(B) Thursday

6 Circle all the pictures that begin with *p*.



7 Mark the word that has the same beginning sound as *mouse*.

(A) make

(B) sand

(C) nose

8 Mark the sight word that completes the sentence.

The ___ clouds are high in the sky.

(A) funny

(B) white

(C) like

9 Mark the set of words that are in ABC order.

(A) bell, farm, water, table

(B) farm, table, water, bell


(C) bell, farm, table, water

10 Rewrite the sentence with correct capitalization, spelling, and punctuation.
it is time for shcool

1 Which shape shows equal parts?



(A)



(B)



(C)

2 If tomorrow is Sunday, then today must be ____.


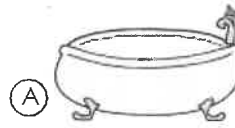
(A) Monday

(B) Saturday

3

$\begin{array}{r} 11 \\ - 3 \\ \hline \end{array}$	$\begin{array}{r} 15 \\ - 9 \\ \hline \end{array}$	$\begin{array}{r} 7 \\ + 8 \\ \hline \end{array}$
--	--	---

4 Which real-life container holds the most liquid?



5 There are 13 ducks in the pond. If six ducks fly away, how many ducks are left in the pond?

$\underline{\hspace{2cm}}$ ○ $\underline{\hspace{2cm}}$ = $\underline{\hspace{2cm}}$
 _____ ducks

Read the passage. Answer the questions.

Dogs for Pets

Dogs can make good pets if you take care of them. They need food and water. They need time to play and exercise. They also need a safe and clean place to live. Taking good care of a dog will make it a happy pet.

6 What is the main idea?

- (A) Dogs like to play.
- (B) Dogs need food and water.
- (C) Dogs need a lot of care.

7 What do dogs like to do?

- (A) play
- (B) run away
- (C) help clean

8 What do dogs need to live?

- (A) toys
- (B) food and water
- (C) a bed

9 Why do you need to take good care of your dog?

- (A) The dog will be happy.
- (B) The dog will never leave you.
- (C) The dog will always be good.

10 Which word belongs in the blank?
Dogs need ____ play.

- (A) time
- (B) go
- (C) to

Summer Break Brain Food WEEK 4: DAY 4

Put the numbers in order from greatest to least.

2 56 17 90 27 44

--	--	--	--	--	--


74 5 88 63 10 32

--	--	--	--	--	--


Sort the numbers into the correct group. WEEK 4: DAY 5

Short Vowel	Long Vowel

cat red
men like
made ship
cute tub
lake




All About My Summer



Name: _____ Date: _____

Handwriting practice lines consisting of four sets of horizontal lines. Each set includes a solid top line, a dashed middle line, and a solid bottom line.



Name _____

Date _____

My Book Report Poster

Book Title and Author



Main Characters


Book Summary

Problem

Solution



Name: _____



Book Report

Title

Author

Illustrator

Write one sentence about your favorite part of the book.

Draw a picture to describe your sentence.